

DUMPSBOSS.

ArchiMate 2 Part 1 Examination

The Open Group OG0-021

Version Demo

Total Demo Questions: 10

Total Premium Questions: 80

Buy Premium PDF

<https://dumpsboss.co>

support@dumpsboss.co

support@dumpsboss.co
dumpsboss.co

Topic Break Down

Topic	No. of Questions
Topic 1, Volume A	39
Topic 2, Volume B	41
Total	80

QUESTION NO: 1

Consider the following symbol, which represents information about a transformation project at ArchiSurance involving systems and business processes:



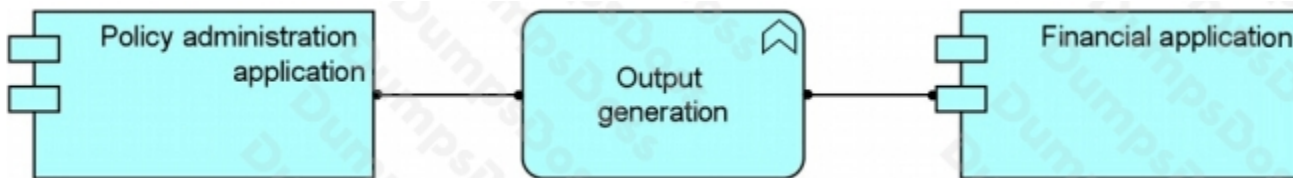
Which of the following statements correctly expresses the meaning of the symbol?

- A. The ArchiSurance legal department has determined the impact of the new regulations
- B. The project must satisfy requirements for additional reporting
- C. The additional reporting requirements in new insurance regulations are driving change at ArchiSurance
- D. The project's systems must be flexible enough to accommodate any future changes in reporting requirements

ANSWER: C

QUESTION NO: 2

Consider the following diagram:



Which of the following statements best interprets this diagram?

- A. Output generation is explicitly modelled as the collective behavior of the application components: Policy administration application and Financial application
- B. Output generation is an application service that is realized in a joint effort of the Policy administration application and the Financial application
- C. Output generation is behavior that is present in the Policy administration application as well as in the Financial application

D. Output generation represents the application collaboration of the Policy administration application and Financial application

ANSWER: C

QUESTION NO: 3

Which of the following answers contains only concepts within the scope of the ArchiMate Implementation and Migration extension?

- A. Work Package, Artifact, Plateau, Driver
- B. Work Package, Deliverable, Plateau, Gap
- C. Project, Work Package, Deliverable, Plateau
- D. Project, Resource, Deliverable, Gap

ANSWER: B

QUESTION NO: 4

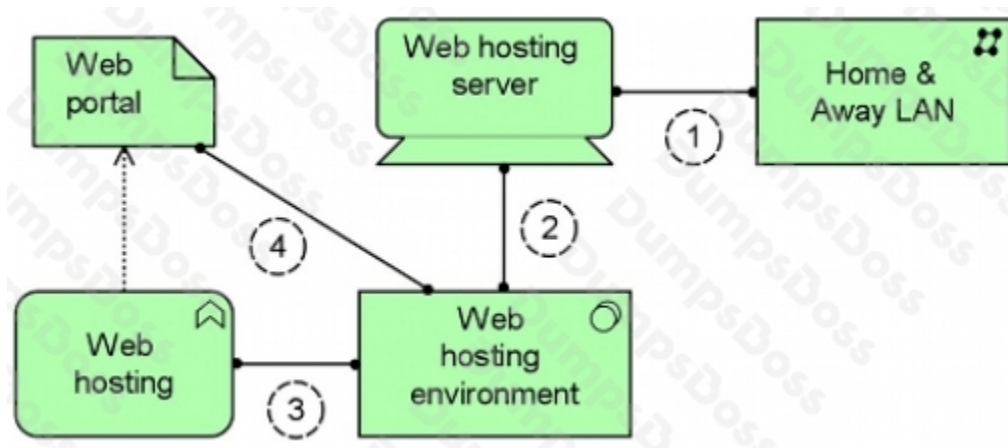
Which concept from the Motivation extension is most appropriate to represent any or all of the results of a SWOT (strengths, weaknesses, opportunities, threats) analysis?

- A. Assessment
- B. Driver
- C. Requirement
- D. Goal

ANSWER: A

QUESTION NO: 5

Consider the following diagram:



Which of the numbered assignment relationships is not allowed according to the ArchiMate metamodel?

- A. Number 1
- B. Number 2
- C. Number 3
- D. Number 4

ANSWER: A

QUESTION NO: 6

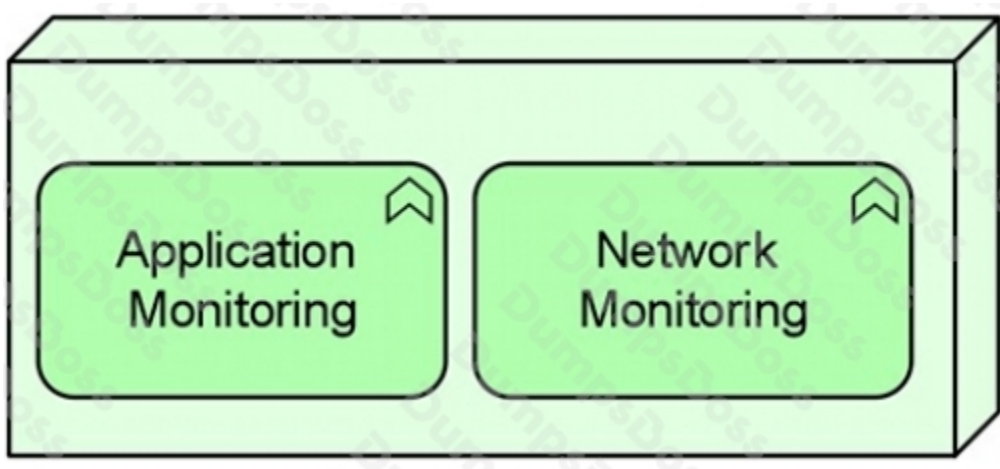
Which of the following best describes how ArchiMate core elements can be related to motivation elements?

- A. Core elements realize requirements and, indirectly, principles and goals
- B. Core elements can be assigned to motivation elements
- C. Core elements influence requirements, constraints, principles and goals
- D. Core elements realize drivers and, indirectly, requirements, constraints, principles and goals

ANSWER: A

QUESTION NO: 7

Consider the following diagram:



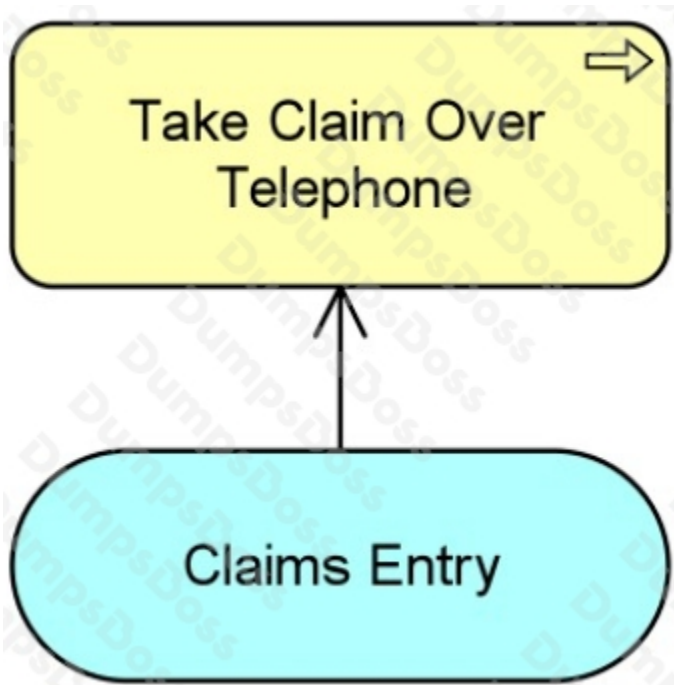
Which of the following best describes what this diagram represents?

- A. A node with two system software environments. One performs Application Monitoring, the other Network Monitoring
- B. A node that performs two functions: Application Monitoring and Network Monitoring
- C. A node that processes two types of data, pertaining respectively to Application Monitoring and Network Monitoring
- D. A node with application components. One performs Application Monitoring, the other Network Monitoring

ANSWER: B

QUESTION NO: 8

Consider the following diagram:



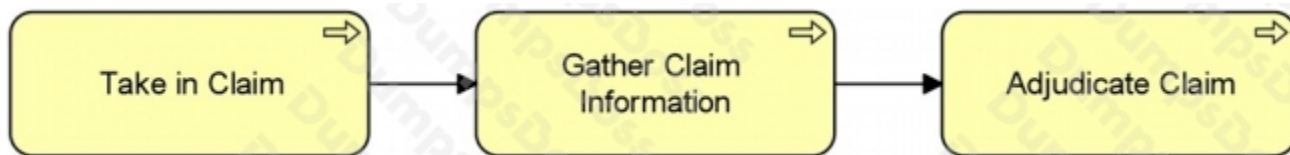
Which of the following answers best interprets the diagram?

- A. The Claims Entry application service realizes the Take Claim Over Telephone business process
- B. The Claims Entry application service is used by the Take Claim Over Telephone business process
- C. Information flows from the Claims Entry application to the Take Claim Over Telephone business process
- D. The Claims Entry business service is used by the Take Claim Over Telephone team

ANSWER: B

QUESTION NO: 9

Consider the following diagram:



What does the diagram express about the relationship between the three processes?

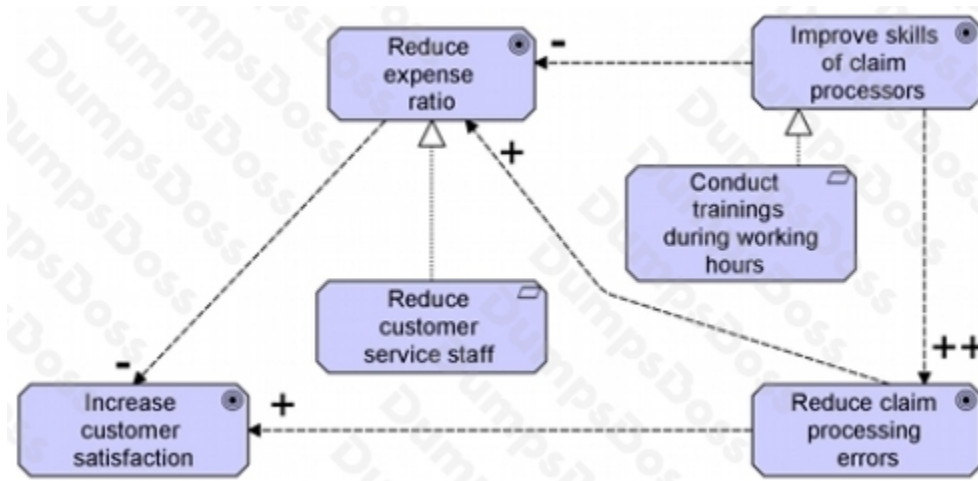
- A. Take in Claim passes information to Gather Claim Information, and Gather Claim Information passes information to Adjudicate Claim
- B. Take in Claim triggers Gather Claim Information, and Gather Claim Information triggers Adjudicate Claim
- C. Take in Claim is used by Gather Claim Information, and Gather Claim Information is used by Adjudicate Claim

D. The three processes may execute in parallel, although they don't have to

ANSWER: B

QUESTION NO: 10

The following is an example of an ArchiMate Goal Contribution view:



Which goals negatively influence other goals?

- A. Reduce expense ratio and Improve skills of claim processors
- B. Reduce customer service staff and Conduct trainings during working hours
- C. Reduce claim processing errors and Reduce expense ratio
- D. Improve skills of claim processors and Reduce customer service staff

ANSWER: A