

DUMPSBOSS.

ArchiMate 2 Combined Part 1 and 2 Examination

The Open Group OG0-023

Version Demo

Total Demo Questions: 10

Total Premium Questions: 103

Buy Premium PDF

<https://dumpsboss.co>

support@dumpsboss.co

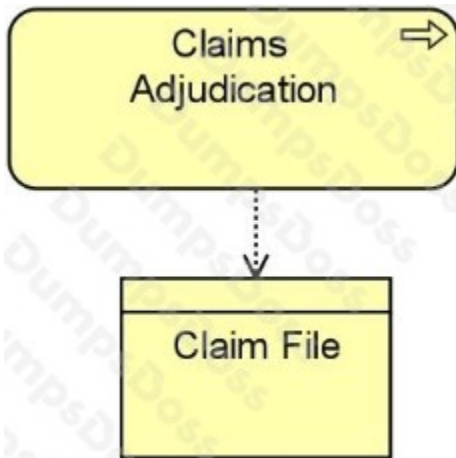
support@dumpsboss.co
dumpsboss.co

Topic Break Down

Topic	No. of Questions
Topic 1, Part 1 Questions	86
Topic 2, Part 2 Scenarios	17
Total	103

QUESTION NO: 1

All ArchiSurance divisions use a Claims Adjudication Process specific to their lines of business to determine whether a claim should be paid as well as the payment amount, Consider the following diagram:



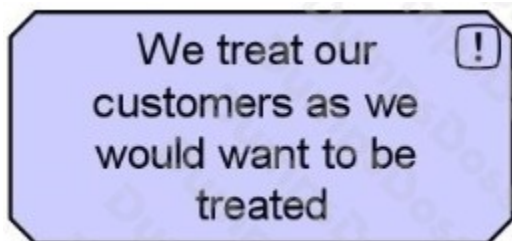
Which of the following statements is expressed by the diagram?

- A. The Claims Adjudication Process realizes the Claim File
- B. Claims are filed after the Claims Adjudication process is complete
- C. The Claims Adjudication team relies on the Claim File to get its work done
- D. The Claims Adjudication process accesses the Claim File

ANSWER: D

QUESTION NO: 2

Consider the following symbol that represents information about a major systems and process transformation project:



What concept does this symbol represent?

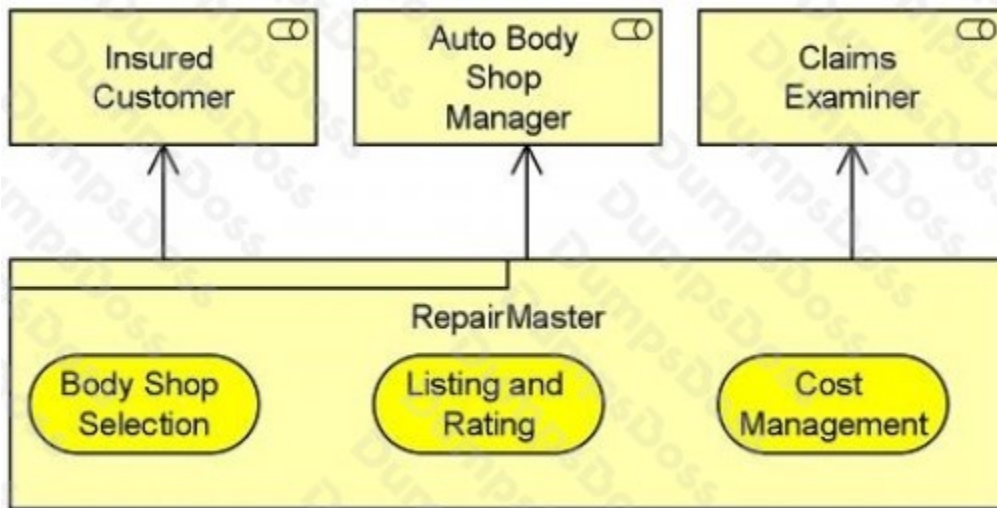
- A. A constraint

- B. A principle
- C. A goal
- D. A requirement

ANSWER: B

QUESTION NO: 3

The PRO-FIT division of ArchiSurance has a new offering that is described by the following diagram:



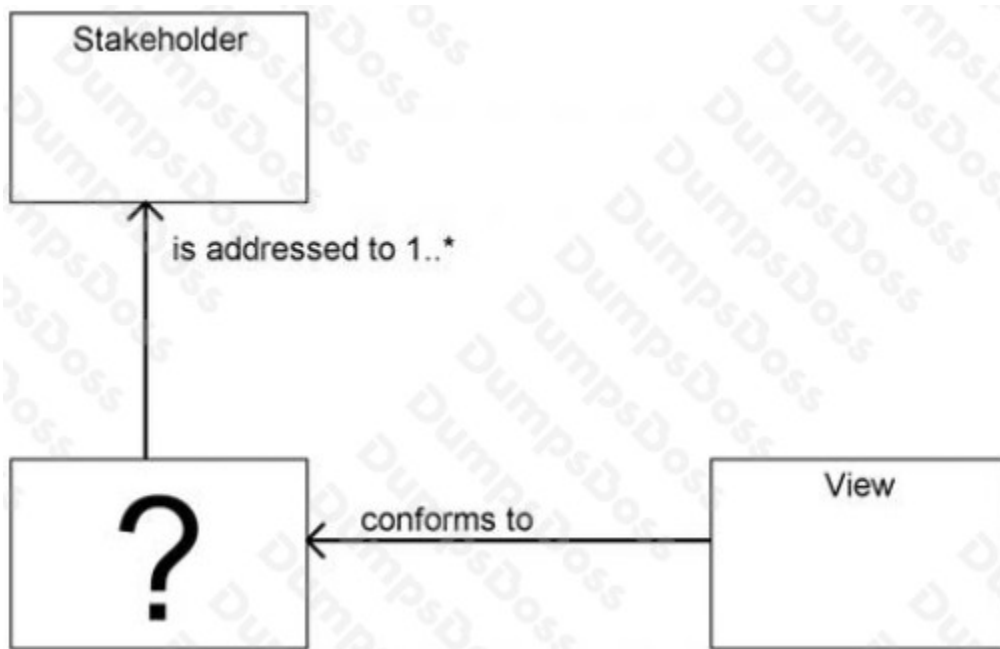
Which of the following statements most accurately interprets this diagram?

- A. RepairMaster is a business product that includes three services and is used by three different roles
- B. RepairMaster is a business service that includes three products and is used by three different business actors
- C. RepairMaster is a business object that holds information about three different services, and is accessed by three different roles
- D. RepairMaster is a business product that delivers three different kinds of value to the three different roles that use it

ANSWER: A

QUESTION NO: 4

The following diagram illustrates the relationship between Stakeholders and Views:



According to the ISO/IEC 40210 standard, how should the box in the lower left corner be labeled?

- A. Viewpoint
- B. Concern
- C. Architectural Description
- D. Model

ANSWER: A

QUESTION NO: 5

Consider the following diagram:



What does the diagram express about the Underwriting Application?

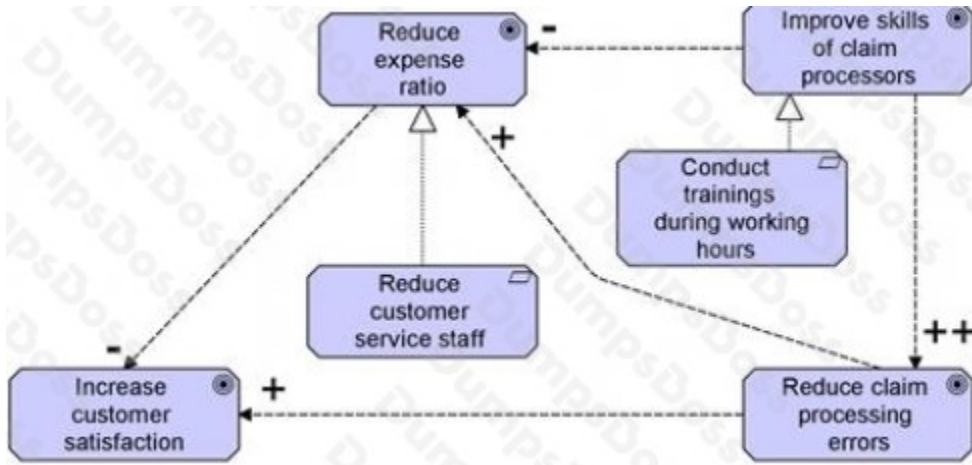
- A. It has three distinct components
- B. It processes three different types of data objects

- C. It performs three different functions
- D. It groups together three components that are not a part of the Underwriting Application

ANSWER: C

QUESTION NO: 6

The following is an example of an ArchiMate Goal Contribution view:



Which goals negatively influence other goals?

- A. Reduce expense ratio and Improve skills of claim processors
- B. Reduce customer service staff and Conduct trainings during working hours
- C. Reduce claim processing errors and Reduce expense ratio
- D. Improve skills of claim processors and Reduce customer service staff

ANSWER: A

QUESTION NO: 7

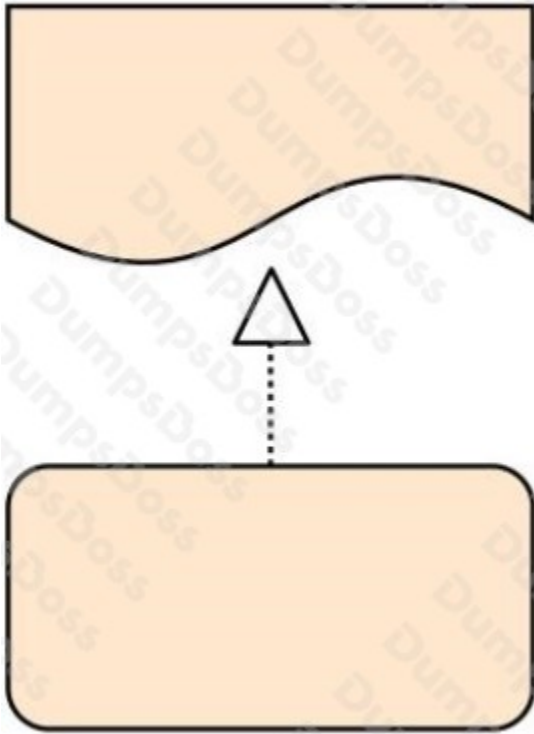
Which application layer concept is defined as a passive element?

- A. Application component
- B. Application function
- C. Data object
- D. Business object

ANSWER: C

QUESTION NO: 8

Consider the following diagram:



Which of the following best describes what this diagram represents?

- A. A work package that realizes a deliverable
- B. A business process that realizes a representation
- C. A work package that realizes a gap
- D. A plateau that realizes a gap

ANSWER: A

QUESTION NO: 9

The Application Co-operation viewpoint describes the relationships between application components in terms of the information flows between them, or in terms of the services they offer and use.

Which of the following concepts cannot be used in an Application Co-operation view?

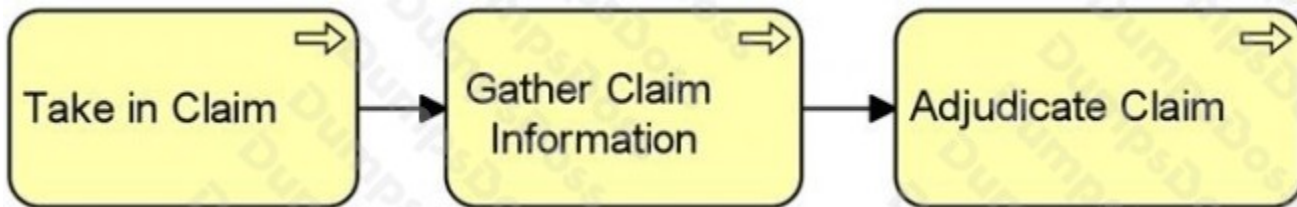
- A. Business object

- B. Location
- C. Application interface
- D. Data object

ANSWER: A

QUESTION NO: 10

Consider the following diagram:



What does the diagram express about the relationship between the three processes?

- A. Take in Claim passes information to Gather Claim Information, and Gather Claim Information passes information to Adjudicate Claim
- B. Take in Claim triggers Gather Claim Information, and Gather Claim Information triggers Adjudicate Claim
- C. Take in Claim is used by Gather Claim Information, and Gather Claim Information is used by Adjudicate Claim
- D. The three processes may execute in parallel, although they don't have to

ANSWER: B